

Homework



**AL BARKAAT PUBLIC SCHOOL
SUMMER VACATION ASSIGNMENT
CLASS -III
SESSION -2024 - 2025**

Summer Escapade: Unleashing Creativity and Curiosity"

"Exploring, Learning, and Relaxing in the Sun"

Welcome to an adventure-filled summer! As the sun shines brightly and the days grow longer, it's time to embark on a journey of exploration and discovery. Our summer holiday homework is not just about assignments; it's about embracing the spirit of the season, igniting your imagination, and nurturing your thirst for knowledge.



IMPORTANT INSTRUCTION

- ✿ Do one page writing everyday to improve your speed and neatness in work. We would love to see your writing practice notebooks when you come back.
- ✿ Do all the work in a scrapbook.




1. Science (EVS-1):-

- 1) Plan a diet chart for a day.
- 2) Choose any one (Grain/Vegetable/Fruit). Write about their journey from the field to the table. Draw or paste the pictures to illustrate your journey.



- 3) Grow a plant and bring it to school. Write day to day observations on A4 size sheets and take a picture of your plant and paste it.






2. English:-

Draw/Paste, colour and label pictures
of **Different kinds of Noun.**

Note:- Homework to be done in the scrapbook under the heading **English Homework.**





3. S.S.T:-

☀Solar System--- Planets and their moons ☀

Objective:- To Know more about planets and their moons of our solar system.

Material Required:-


- 1) A scrapbook
- 2) Printed images of planets and their moons
- 3) Markers and pencil colours
- 4) Decorative items (optional)

Instructions:-

☝ Find out interesting pieces of information about planets and their moons in the solar system.

☝ Write 2-3 lines on each of the planet and their moons.

☝ Collect the pictures of the planets and their moons and paste these pictures in the scrapbook.



4. HINDI:-

ग्रीष्मकालीन अवकाश हेतु गृह कार्य
सत्र **2024- 25**

कक्षा - **3**

- * अपनी पाठ्यपुस्तक रिमझिम के पाठ **3** से **5** तक आरोह अवरोह के साथ पठन-पाठन।
- * स्वर एवं व्यंजन स्क्रेपबुक पर लिखिए।
- * भाषा तथा भाषा के रूप को दैनिक दो उदाहरणों द्वारा लिखिए एवं याद कीजिए।

5. URDU:-

CLASS 3

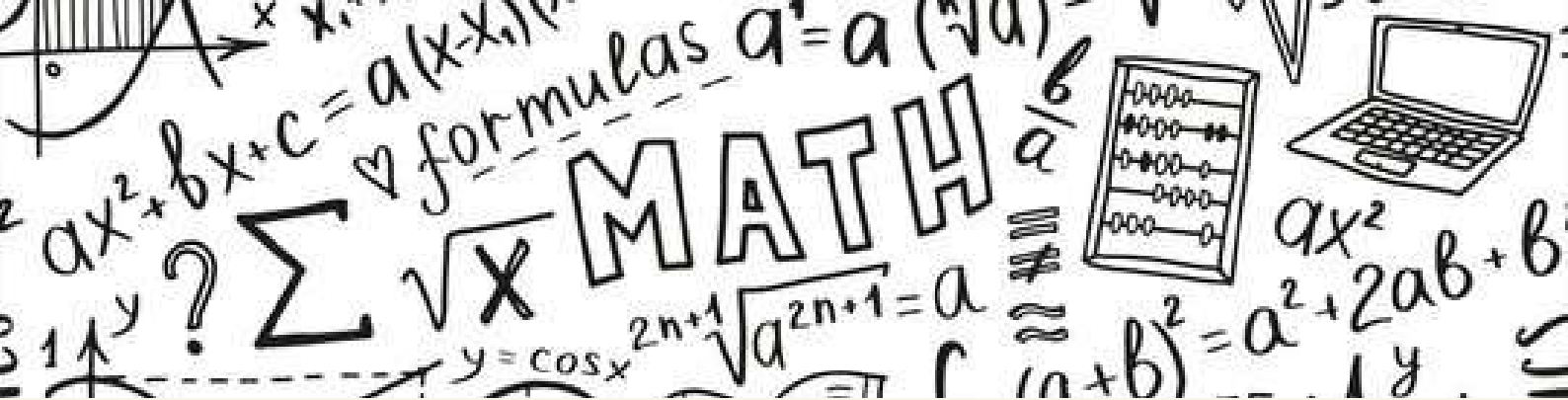
Urdu Holiday Home work

”میرا وطن ہندوستان“ پر

دس (10) لائنیں لکھیے اور

اپنے پیارے وطن کی تصویر

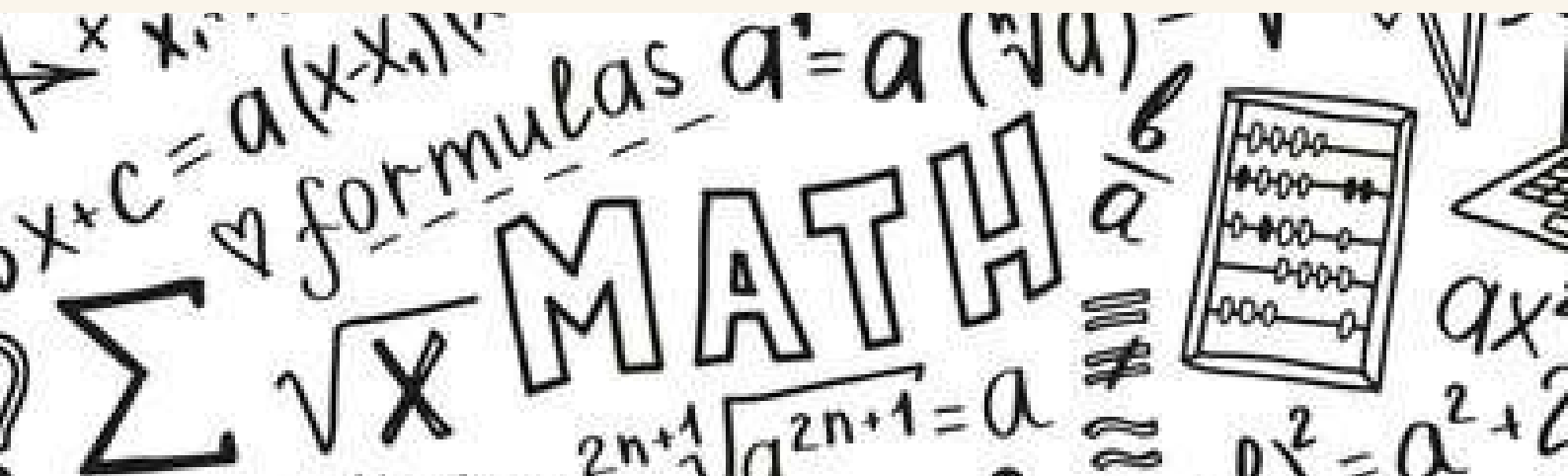
بھی چسپاں کیجئے۔



6. MATHEMATICS:-

DO THE WORKSHEETS GIVEN
BELOW.

Note:- Kindly take out the printout of the worksheets



Al-Barkaat Public School

Junior Wing

Class – III

Maths Worksheet

CHAPTER-1 (NUMBERS UP TO 9999)

WORKSHEET- BASIC

CHOOSE THE CORRECT OPTION:

- Q1. Which place should we compare to determine the greater of the given numbers 243608 and 243698? _____
- a) Tens b) hundreds c) thousands d) ones
- Q2. The numeral for $6000 + 30 + 5$ is _____
- a) 6305 b) 6035 c) 635 d) 653

FILL IN THE BLANKS:

- Q3. The smallest 4-digit number is _____
- Q4. The successor of 5139 is _____
- Q5. Write the smallest 4-digit number using the digits 9 , 2 , 8 and 0 only once.

Short Answer Type question –

- Q6. Draw an abacus and show the place value of the underlined digit in 9 0 7 5
- .Q7. Write the expanded form of 6734 in two ways.

Short Answer Type question – II

Q8. Compare using $>$, $<$, $=$

- a) 1389 _____ 1938
- b) 200 _____ 2002
- c) 999 _____ 9099

- Q9. a) Write the successor of the largest 3-digit number.
- b) Write the predecessor of the smallest 4-digit number.

Al-Barkaat Public School
Junior Wing
Class – III
Maths Worksheet

SUBJECT-MATHEMATICS, CLASS:III
CHAPTER-1 (NUMBERS UP TO 9999)
WORKSHEET- STANDARD

CHOOSE THE CORRECT OPTION :

- Q1. If the places of the digits 5 and 6 are interchanged in the numeral 5176, then the new numeral is -
a) 1756 b) 6175 c) 7165 d) 7561
- Q2. The sum of the place values of 3 in 3438 is _____
a) 3000 b) 3300 c) 3030 d) none of these

FILL IN THE BLANKS:

- Q3. The numeral for $5000 + 4$ is _____
- Q4. The place value of 0 in 7048 is _____

Answer The Following:

Write True or False

- Q5. 10 more than 2980 is 2990. _____
- Q6. The greatest four digit number is 1000. _____

Short Answer Type question – I

- Q7. Rewrite the following in ascending order.
4295 , 295 , 429 , 955 , 2559
- Q8. Compare the place values of the underlined digit in the numeral 4 2 4 5

Short Answer Type question – II

- Q9. Complete the pattern.
2027 , 2028 , 2029 , _____ , _____
- Q10. Write the first three 4-digit numbers.

Al-Barkaat Public School

Junior Wing

Class – III

Maths Worksheet

SUBJECT-MATHEMATICS, CLASS:III
CHAPTER-1 (NUMBERS UP TO 9999)
WORKSHEET- HOTS

CHOOSE THE CORRECT OPTION:

Q1. $7000 + 200$ is

- a) 7020 b) 7100 c) 7001 d) None of these

Q2. The sum of the place values of 4 in the successor of 4848 is _____

- a) 400 b) 40000 c) 4040 d) 4000

FILL IN THE BLANKS:

Q3. The smallest four digit number using 4 different digits is _____

Q4. _____ tens make 1 thousand.

Answer The Following:

Q5. Write the predecessor of the successor of

999

Q6. Which is greater ?

Greatest 3-digit number or Smallest 4-digit number.

Short Answer Type question – I

Q7. Find the successor of the successor of 99.

Q8. Write the greatest 4-digit and the smallest 4-digit number using three different digits. (Repetition of digits allowed)

Short Answer Type question – II

Q9. Complete the pattern.

1928 , 2828 , 3728 , _____ , _____ , _____

Q10. Write all the numbers which comes in between the successor of the greatest 4-digit number and the predecessor of 1006.



Thank
you!